

NAMATABA TOWN COUNCIL

ACADEMIC BOARD 2022

SOCIAL STUDIES WITH RELIGIOUS EDUCATION

PRIMARY SEVEN

Time Allowed: 2hours 15 Minutes

RANDOM NO.						PERSON NO.		

Candidate's Name:

Candidate's Signature:

DISTRICT ID NO:

--	--	--	--

Read the following instruction carefully

1. Do not write your school or district name anywhere on this paper.
2. This paper has two sections A and B, section A has 40 questions and section B has 15 questions.
3. Answer all the questions. All answers to both sections A and B must be written in the spaces provided
4. All answers must be written using blue or black ball point pen or ink. Any work written in pencil will not be marked.
5. Unnecessary change in your work and handwriting that cannot be read easily may lead to loss of marks
6. Do not fill in anything in the table indicated

For Examiners' use only and boxes inside the question paper.

FOR EXAMINERS' USE ONLY

QN NO.	1-10	11-20	21-30	31-40	41-43	44-46	47-49	50-52	53-55	TOTAL
MARKS										
EXR'S NO.										

SECTION A

1. Which map symbol helps map reader to calculate the actual ground distance on a map?

2. Ndugumali is travelling in the North- Eastern direction. If he turns 45° clockwise, which new direction will he face?

3. Give one attribute of Uganda as an independent nation.

4. Why should we plant grass in the school compound?

5. How did the Swahili culture and Kiswahili language come into existence?

6. Name the country that joined the East Africa community recently.

7. Mention the tax charged on imported goods.

8. Why tourism is called an industry?

9. Draw a symbol of a seasonal lake in the space below.
10. Why do both Uganda and Zambia use English as their official language?

11. What is the importance of longitude 180° East or West of the prime Meridian?

12. What was the major cause of the Lamogi Rebellion that was fought in 1911-1912?

13. Under which ethnic group do the Bahima belong?

14. Identify one factor that influences the climate of an area.

15. Why would you advise people in Bundibugyo to keep donkeys?

16. What is population distribution?

17. Which river in West Africa is associated with the death of explorer Mungo Park?

18. Why are most game parks located in the savannah region of Africa?

19. How can one become a political leader in a country?

20. Write U.W.E.C in full.

21. Why was Liberia not colonized?

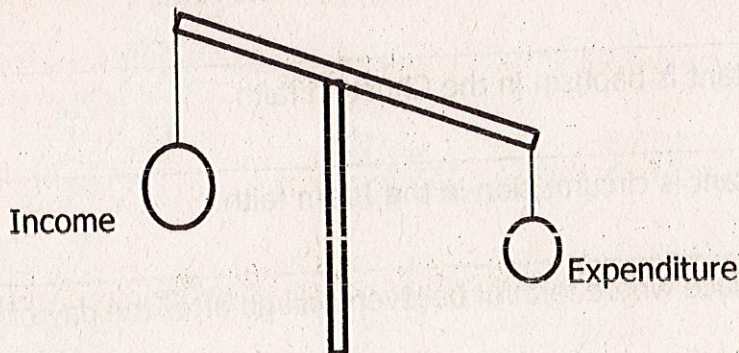
22. How does rural electrification conserve the environment in rural area?

23. State any one way children can promote security at home in the absence of elders.

24. Why did the people of Eastern Uganda hate the activities of Semei Kakungulu?

25. Why did Kabaka Mwanga order for the killing of the Uganda Martyrs?

26. The diagram below shows one type of a budget. Use it to answer question 26



Give one disadvantage of the above type of budget.

27. Which organization was replaced by the African Union (AU)?

28. In which way did William Mackinnon help in the development of East Africa?

29. Of what importance is the Niger Delta in the economic development of Nigeria?

30. Why is Uganda and Kenya said to be lying in both the Northern and Southern Hemisphere?

31. Give any one advantage of using mobile money transaction?

32. How did Covid-19 pandemic affect education in Uganda?

33. What name is given to the narrowest water passage between Africa and Europe?

34. Why was the Berlin conference of 1884-1885 important to the European countries?

35. Which tribe in Uganda is similar to the Fulani of Nigeria?

For questions 36-40, answer Either the Christian or Islam question but not both no mark will be awarded to a candidate who attempts both alternatives in a number.

36. Either: Give one reason why Christians kneel during prayers?

OR: Why do Moslems stand in row during prayers?

37. Either: Why did God instruct Noah to build the Ark?

OR: Why did Allah instruct Nuhu to build the Ark?

38. Either: How important is baptism in the Christian faith

OR: How important is circumcision in the Islam faith

39. Either: Name the place where faithful believers will go after the day of final judgment.

OR: Name the place where faithful Moslems will go after the day of final judgment

40. Either: Who was the first prophet to announce the coming of the saviour?

OR: Who was made the father of all Moslems?

SECTION B

41. (a) What is a land-locked country? _____

(b) Mention one land-locked country in the Horn of Africa.

(c) Identify any two problems faced by a land-locked country.

(i) _____

(ii) _____

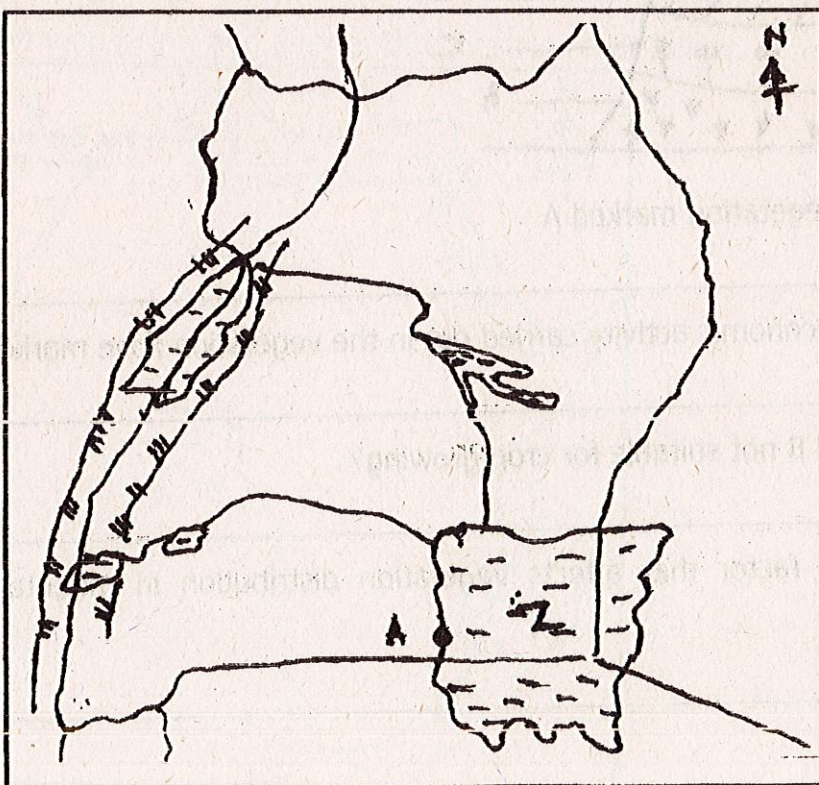
42 (a) What do you understand by Apartheid policy as practiced in South Africa?

(b) Mention any one Bantustan state that existed in South Africa.

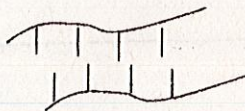
(c) State any one effect of apartheid policy.

(d). Suggest any one way apartheid policy was fought.

43. Use the map below to answer question 43 (a)-(d).



(a) Give the political importance of the feature marked



(b) Name the inland port marked A.

(c) Give one reason why feature marked Z has fresh water.

(d) Use letter P to indicate the location of Kidepo National Game Park.

44. (a) What is population growth?

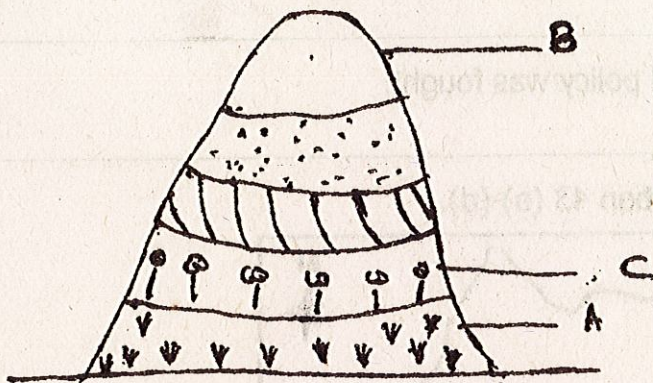
(b) State any two factors that influence population distribution in an area.

(i)

(ii)

(c) Give one danger of high population in an area.

45. Study the diagram below and answer the questions that follow.



(a) Name the natural vegetation marked A.

(b) What is the major economic activity carried out in the vegetation zone marked C?

(c) Why is area marked B not suitable for crop growing?

(d) Identify one major factor that affects vegetation distribution in mountainous areas of Africa.

46. Match the information from list A to that of list B

List A

List B

Ludirvig Krapf

Succeeded in finding sea route to India

Nelson Mandela

Made three exploration journeys

Vasco Da Gama

Translated the Bible into Kiswahili

Dr. Living Stone

Fought against apartheid

1) Ludirvig Krapf _____

2) Nelson Mandela _____

3) Vasco Da Gama _____

4) Dr. Living Stone _____

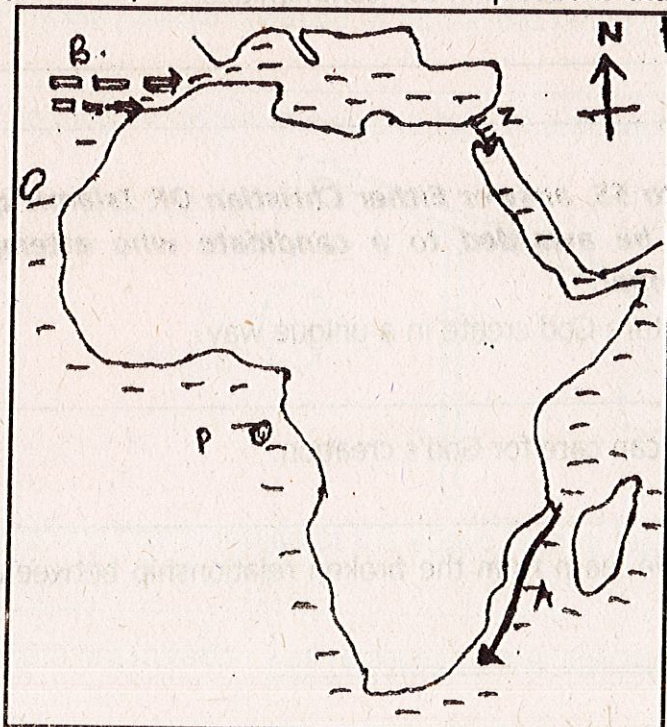
47. (a) How was the area between Southern Sudan and Northern Uganda referred to during colonization period?

(b) Give one reason why Egypt wanted to colonise the whole Nile valley?

(c) Mention the last governor of Equatorial appointed by Khedive Ismail.

(d) How did the Acholi benefit from the administration of Sir Samuel Beker in the Equatorial province?

48. Study the map below and answer the questions that follow.



(a) Name the Ocean current marked A.

(b) Identify how the prevailing wind marked B affects the climate of North West Africa.

(c) Name the Island country marked P.

(d) Of what importance is the water body marked Z to traders?

49. (a) Write Covid-19 in full.

(b) Mention one challenge of Covid-19 to the people of Uganda.

(c) Give any two ways the government of Uganda has tried to control the spread of Covid-19 to its people.

(i) _____

(ii) _____

50. (a) What is child abuse?

(b) In which one way are children responsible for the abuse of their own rights?

(c) Mention any two results of child abuse in our communities.

(i) _____

(ii) _____

For each of the questions 51 to 55, answer Either Christian OR Islamic questions but Not both. No mark will be awarded to a candidate who attempts both alternatives in a particular number.

51. Either: (a) State the creature God create in a unique way.

(b) Give any one way man can care for God's creation.

(c) Give any two lessons we learn from the broken relationship between God and man.

(i) _____

(ii) _____

OR:(a) State the creature Allah created in a unique way.

(b) Give any one way man can care for Allah's creation.

(c) Give any two lessons we learn from the broken relationship between Allah and man.

(i) _____

(ii) _____

52. Either (a) How many times is a Christian expected to pray in a day?

(b) Give any one way man can come closer to God.

(c) Identify any one request from the Lord's Prayer.

OR:(a) How many times is Moslem expected to pray in a day?

(b) Give any two ways man can come closer to Allah.

(i) _____

(ii) _____

(c) What is the first prayer in day under Islam?

53. Either:(a) Who is a prophet?

(b) Identify any two prophets in the Bible.

(i) _____

(ii) _____

(c) Give any one quality of a prophet.

OR:(a) Who is a prophet?

(b) Identify any two prophets in the Bible

(c) Give any one quality of a prophet.

54. Either (a) How is marriage called in Christianity?

(b) Give any two reasons why people marry.

(i) _____

(ii) _____

(c) Identify any one quality of good marriage partner.

OR:(a) How is marriage called in Islam?

(b) Give any two reasons why people marry.

(i) _____

(ii) _____

(c) Identify any one quality of good marriage partner.

55. Either: (a) Who called Abraham?

(b) Write down any one way Abraham showed his faith in God.

(c) Mention any two promises God made to Abraham.

(i) _____

(ii) _____

OR:(a) Who called Ibrahim?

(b) Write down any one way Ibrahim showed his faith in Allah.

(c) Mention any two promises Allah made to Ibrahim.

(i) _____

(ii) _____